

Dodawanie w zakresie 0 - 10.

1. Uzupełnij działania według podanego schematu.

$2+3=5$



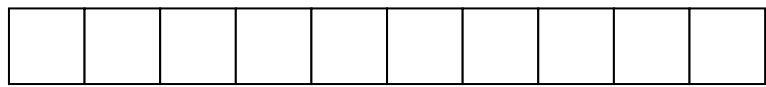
$6+1=$




$4+3=$




$5+4=$




$1+7=$



$2+8=$



$8+0=$



2. Uzupełnij grafy.

+4 +2

+

$3+4+2=$ $=3+$

+3 +5

+